

VIDYA BHAWAN BALIKA VIDYA PITH

CLASS- 5

DATE – 18. 04. 21

SUB -MATHS

S. T - PRAGYA

BASED ON N.C.E.R.T PATTERN :

CH – 1

1. Write the number and number name each Abacus represents in the International Number system.

(a)

1	2	3	4	5	6	7
M	HTh	TTh	Th	H	T	O

Name :

Number name :

.....


(b)

2	1	3	2	1	1	2	1
TM	M	HTh	TTh	Th	H	T	O

Name :

Number name :

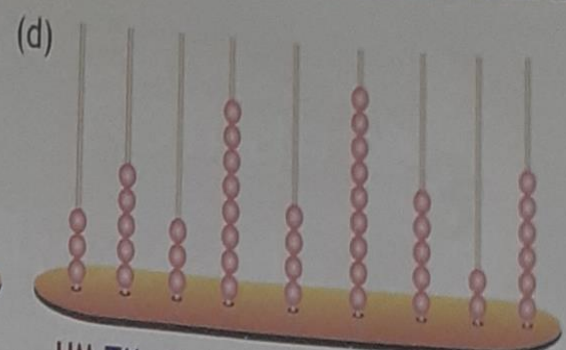
.....



HM TM M HTh TTh Th H T O

Name :

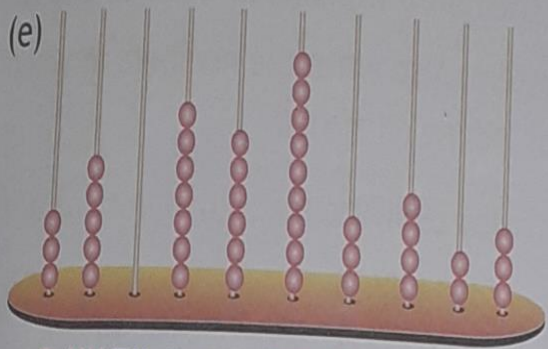
Number name :



HM TM M HTh TTh Th H T O

Name :

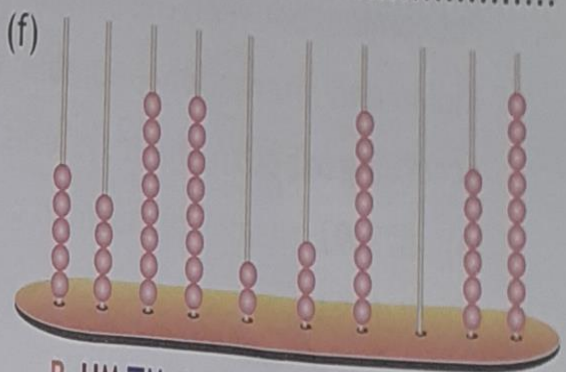
Number name :



B HM TM M HTh TTh Th H T O

Name :

Number name :



B HM TM M HTh TTh Th H T O

Name :

Number name :
